

Daily Challenge - PE and Maths #12



Run the Venues ~ 2 Climbing + Endurance






Using your stairs



Focus on dividing by 12
(12 steps per staircase)

Work out the number of times
to climb the stairs

- Venue size \div 12
- Complete the climb

Famous Venue	Size of Venue (number of floors to the nearest 12)	(\div by) 12	(=) number of climbs to complete
Hogwarts 	144		
The Shard 	312		
Bank of China Tower 	840		
One World trade centre 	1248		
Burj Khalifa (Challenge) * Largest building in the world 	1956		